



Affiliated to CBSE

**HARYANA
PUBLIC SCHOOL**

Affiliation No. 5304/16

संस्कार से सफलता तक

विद्यया ददाति विनियम्



THE

**VENKATESHWAR
SCHOOL**

AN ISO 9001 : 2015 Certified

GURUGRAM

1ST ALL INDIA BRAIN LEAGUE EXAM 2026

Class - II

Time: 60 Minutes

M.M =30

General Instructions:

1. The duration of the examination is 60 minutes. Question paper contains 30 questions with maximum 30 marks
2. There will be negative marking in Phase - II, i.e. $\frac{1}{4}$ mark will be deducted for each incorrect answer.
3. Use of gadgets is not allowed.
4. Students must abide by the instructions issued during the examination by the invigilator or the centre incharge.
5. Before attempting the question paper ensure that it contains all pages & no question is missing
6. Immediately fill the particulars on this page of the test booklet and OMR with BLACK ballpoint pen only. Use of pencil is strictly prohibited.
7. Fill and darken the bubbles completely. Do not put a tick or a cross.
8. Half-filled or over-filled bubbles will not be read by the software & liable to be rejected.

Correct Method



Wrong Method



Student's Signature

Invigilators's Signature

SPECIAL CLASSES FOR- IIT-JEE, NEET, CS ENTRANCE EXAM, CA FOUNDATION, NDA, CLAT & OLYMPIADS

Address: Nangal Choudhary Road, Near Jal Mahal, Narnaul (Haryana), **Website:** WWW.hpsnarnaul.co.in,

Gmail- haryanapublicscho@gmail.com **Contact no.** 9468285002, 94663 84870, 8199965994

English

1. Which of the following is NOT a common noun?

- A. Cat
- B. River
- C. Ganga
- D. Chair

2. Choose the singular form of "geese":

- A. Goose
- B. Geeses
- C. Geese
- D. Goosen

3. What is the masculine form of "niece"?

- A. Nephew
- B. Niece
- C. Uncle
- D. Cousin

4. Which pronoun would replace "the dog and the cat"?

- A. It
- B. We
- C. They
- D. Him

5. Which of these words is an adjective?

- A. Quickly
- B. Small
- C. Run
- D. Teacher

6. A child is in a swimming pool. Which action he is doing?

- A. Running
- B. Sleeping
- C. Swimming
- D. Reading

7. "The students in the classroom this morning."

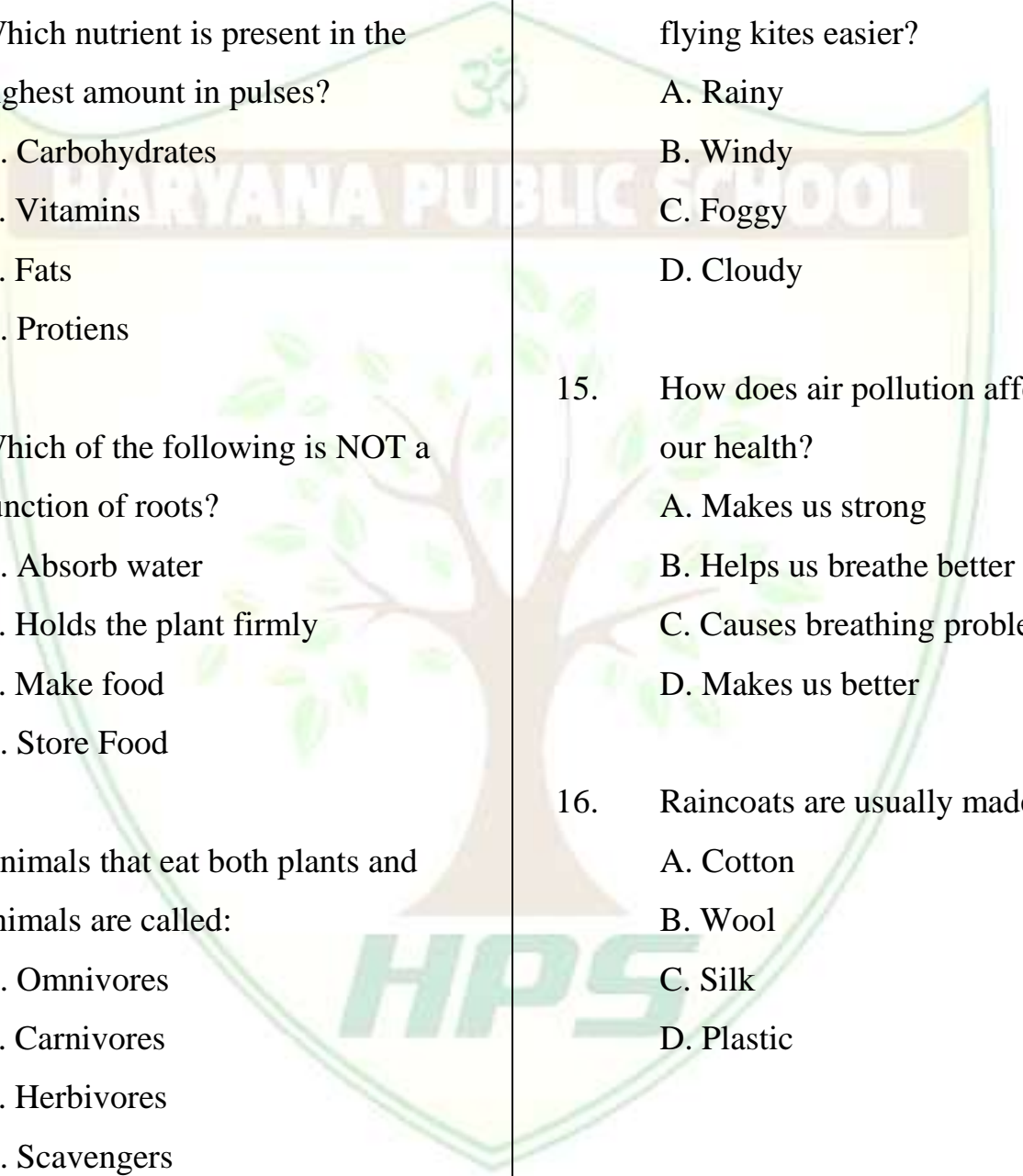
- A. Was
- B. Were
- C. Is
- D. Are

8. "They a picnic last Sunday."






- A. Has
- B. Have
- C. Had
- D. Having

EVS

9. Which part of the body protects the lungs and the heart?

- 
- A. Skull
B. Spine
C. Rib cage
D. Muscles
10. Which nutrient is present in the highest amount in pulses?
A. Carbohydrates
B. Vitamins
C. Fats
D. Proteins
11. Which of the following is NOT a function of roots?
A. Absorb water
B. Holds the plant firmly
C. Make food
D. Store Food
12. Animals that eat both plants and animals are called:
A. Omnivores
B. Carnivores
C. Herbivores
D. Scavengers
13. Which gas is most important for breathing?
A. Carbon dioxide
B. Oxygen
C. Nitrogen
D. Hydrogen
14. Which weather condition makes flying kites easier?
A. Rainy
B. Windy
C. Foggy
D. Cloudy
15. How does air pollution affect on our health?
A. Makes us strong
B. Helps us breathe better
C. Causes breathing problem
D. Makes us better
16. Raincoats are usually made of:
A. Cotton
B. Wool
C. Silk
D. Plastic

Mathematics


17. What is the face value of 7 in the number 374?
A. 7 B. 700
C. 70 D. 17
18. If you add 1 to the smallest 3 – digit number, what will you get?
A. 100 B. 101
C. 1000 D. 1001
19. What is 100 more than 389?
A. 399 B. 499
C. 589 D. 489
20. Make the smallest and largest three digit numbers using 8, 4, 5 ?
A. 458,548
B. 456, 854
C. 548,548
D. 458, 854
21. If $\star + \star = \text{😊}$, what will be the value of $\star \cdot \star \cdot \star \cdot \star =$

a. 
b. 
c. 
d. 
22. A bus had 268 passengers. 160 got down at one stop. How many passengers remain?
A. 200 B. 208
C. 190 D. 108
23. How many sides does a pentagon has?
A. 5 B. 7
C. 8 D. 6
24. A box has 24 pencils. How many pencils are there in 8 such boxes?

- A. 182 B. 2 03
C. 192 D. 212

General Knowledge

25. Which organ helps us think, learn, and remember?
A. Liver B. Heart
C. Brain D. Lungs
26. What is special about a local market?
A. It is very quiet
B. It sells daily-use items
C. It is only for children
D. It is inside a school
27. Which building is a symbol of national pride?
A. House
B. School
C. Parliament building
D. Shop
28. Why do we celebrate special days?
a. To waste time
b. To remember important events and people
c. To skip school
d. To sleep all day
29. Why do people celebrate festivals of faith?
a. To play games only
b. To show religious beliefs and traditions
c. To go to school
d. To shop every day
30. Which of the following is a popular market in Delhi?
A. Chandni Chowk
B. Times Square
C. Oxford Street
D. Central Park

Answer Key (Class: 2nd)

English: 1. C-Ganga 2. Goose 3. Nephew 4. They 5. Small 6. Swimming 7. B. Were 8. C. Had	EVS: 9. C. Rib cage 10. D. Protiens 11. C. Make food 12. A. Omnivores 13. B. Oxygen 14. B. Windy 15. C- Causes breathing problems 16. D. Plastic
Mathematics: 17. A. 7 18. B. 101 19. D. 489 20. D. 458, 854 21. B.  22. D. 108 23. A. 5 24. C. 192	General Knowledge: 25. C-Brain 26. B- It sells daily-use items 27. C- Parliament building 28. B- To remember important events and people 29. B-To show religious beliefs and traditions 30. A- Chandni Chowk